

 UKA TARSADIA university Quality Education. Inspiring Minds. Transforming Lives.	ENTRANCE TEST FOR GODAVARIBA SCHOOL OF INTERIOR DESIGN, 2018 UKA TARSADIA UNIVERSITY, MALIBA CAMPUS, BARDOLI	
	SECTION-1	
Instructions:	<ul style="list-style-type: none"> • Total Marks for Section-1: 30 marks • Time : 1 Hour • Section-1 has to be filled up and submitted in the examination hall • Put Tick Mark (✓) mark on the correct answer as shown in the sample question • No negative marking for wrong answer • Once you have entered the examination hall, you are not allowed to leave it, until you have finished the test. 	

SAMPLE QUESTION	Who is the current prime minister of India?			
	a) ✓	Narendra Modi	b)	Manmohan Singh
	c)	Sonia Gandhi	d)	Pranab Mukherjee

A.	GENERAL KNOWLEDGE	15 Marks
-----------	--------------------------	-----------------

1.	Who was the architect of Jaipur city?			
	a)	Ram Singh-II	b)	Jai Singh-I
	c)	Man Singh-I	d)	Vidyadhar Bhattacharya
2.	Which city of India is declared as "Heritage City" by UNESCO?			
	a)	Haryana	b)	Kolkata
	c)	Jaipur	d)	Ahmedabad
3.	Which planet is nearest to the earth?			
	a)	Mercury	b)	Venus
	c)	Mars	d)	Jupiter
4.	How long is the sea coast line of Gujarat?			
	a)	1600 km	b)	1000 km
	c)	1500 km	d)	990 km
5.	Who is the composer of national song?			
	a)	Rabindranath Tagore	b)	Bankim Chandra Chattopadhyay
	c)	A. K. Ramanujan	d)	Harivansh Rai Bachchan

6.	Identify the given image			
				
	a)	Elevator	b)	Ramp
	c)	Escalator	d)	Stairs
7.	Who is the director of Race-3 ?			
	a)	Arbaz Khan	b)	Remo D'Souza
	c)	Karan Johar	d)	Anurag Kashyap
8.	Who is the current CM of Uttar pradesh?			
	a)	Mulayam Singh Yadav	b)	Mayawati
	c)	Akhilesh Yadav	d)	Yogi Adityanath
9.	On which date "World Environment Day" is celebrated?			
	a)	June 21	b)	May 1
	c)	May 21	d)	June 5
10.	Kilometer is a unit of _____ .			
	a)	Area	b)	Length
	c)	Distance	d)	Volume
11.	Who's the current captain of Indian Football Team?			
	a)	Sunil Chhetri	b)	Robin singh
	c)	Sandesh Jhingan	d)	Subrata Pal

12.	Identify the material given in image		
			
	a)	Asbestos cement sheet	b) Cement Sheet
	c)	GI sheet	d) Corrugated Sheet
13.	Uttar Pradesh is surrounded by how many states?		
	a)	9	b) 8
	c)	4	d) 5
14.	Which place is known as “Greenest Capital City” of Asia?		
	a)	Gandhinagar	b) Chandigarh
	c)	Kerala	d) Darjeeling
15.	In which state “Badami Cave Temple” is situated?		
	a)	Uttar Pradesh	b) Maharashtra
	c)	Karnataka	d) Madhya Pradesh

B.

LOGICAL REASONING AND VISUAL PERCEPTION

15 Marks

1.	Look at this series: 7, 10, 8, 11, 9, 12, ... What number should come next?			
	a)	7	b)	10
	c)	12	d)	13
2.	Ayesha's father was 38 years of age when she was born while her mother was 36 years old when her brother four years younger to her was born. What is the difference between the ages of her parents?			
	a)	8 years	b)	4 years
	c)	2 years	d)	6 years
3.	Find out the alternative figure which contains figure (X) as its part.			
	a)	1	b)	2
	c)	3	d)	4
4.	Choose the alternative which is closely resembles the mirror image of the given combination			
	<p>SUPERVISOR</p> <p>(1) ROSIVREQU2 (2) SUBERVISOR</p> <p>(3) R2ONVREPIA (4) SUBERVIO2R</p>			
	a)	1	b)	2
	c)	3	d)	4
5.	Find the number of square in the given figure.			
	a)	11	b)	21
	c)	24	d)	26

6. Choose the box that is similar to the box formed from the given sheet of paper (X).

(X) (1) (2) (3) (4)

- | | | | |
|----|--------------|----|------------------|
| a) | 1 only | b) | All of the above |
| c) | 1,3 & 4 only | d) | 2 & 4 only |

7. Identify the figure that completes the pattern. (x)

(X) (1) (2) (3) (4)

- | | | | |
|----|---|----|---|
| a) | 1 | b) | 2 |
| c) | 3 | d) | 4 |

8. Find out from amongst the four alternatives as to how the pattern would appear when the transparent sheet (X) is folded at the dotted line.

(X) (1) (2) (3) (4)










- | | | | |
|----|---|----|---|
| a) | 1 | b) | 2 |
| c) | 3 | d) | 4 |


9. Choose a figure which would most closely resemble the unfolded form of Figure (Z).

X Y Z

(1) (2) (3) (4)

- | | | | |
|----|---|----|---|
| a) | 1 | b) | 2 |
| c) | 3 | d) | 4 |

10.	Identify the currency of Japan.			
				
	(1)	(2)	(3)	(4)
	a)	1	b)	2
	c)	3	d)	4
11.	Identify the building given below			
				
	a)	Lotus temple	b)	Opera House
	c)	Sun temple	d)	Sachi Stupa
12.	La tomatina festival is celebrated in which country?			
	a)	Spain	b)	France
	c)	Dublin	d)	Canada
13.	Which of the following is the shade of the colour Blue?			
	a)	Crimson	b)	Persian
	c)	Ultra marine	d)	chrome
14.	What is the full form of RGB?			
	a)	Red, Grey, Brown	b)	Reddish, Grey, Black
	c)	Red, Green, Blue	d)	Red, Green, Black
15.	One of the images shown below is a misfit in the group. Identify it.			
				
	(1)	(2)	(3)	(4)
	a)	1	b)	2
	c)	3	d)	4

	ENTRANCE TEST FOR GODAVARIBA SCHOOL OF INTERIOR DESIGN , 2018 UKA TARSADIA UNIVERSITY, MALIBA CAMPUS, BARDOLI
	SECTION-2
Instructions:	<ul style="list-style-type: none"> • Total Marks for Section-2: 70 Marks • Time : 2 Hours • Section-2 has to be filled up in drawing sheet provided in the exam hall • Draw neat and legible drawings as instructed

A. DRAWING AND VISUALISATION	25 Marks
<p>Draw a 3D composition of three Cubes, a pair of Cylinders, with one cone and cuboid. Use graphite pencils for your drawing and rendering. Show Light and Shadow in the composition.</p> <p style="text-align: center;">OR</p> <p>Draw a composition of overlapping Bottles and glasses of water. Show 3 bottles and 2 glasses of different height and material. Drawing should be proportionate, well composed and rendered with colour pencil. Assume that light is falling from above at an angle of 45° from your right-hand side.</p>	
B. TECHNICAL REPRESENTATION	20 Marks
<p>Draw a logo for Foot Ball Tournament using Circles, Triangles & Squares, Also give a punch line for the logo. Use only three colours to render the logo.</p>	
C. VISUAL PERCEPTION	25 Marks
<p>Colour the grid given below by choosing suitable colour scheme. Fill only one colour in one square. Express the spirit/experience of any one of the following place in your graphic.</p> <p>(a) Water Kingdom (b) Indian Festivals (c) Hospital</p>	
